




7.3 Warm Up

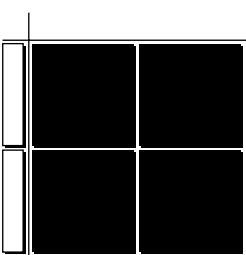
1. Write a division statement for each set of algebra tiles.

a) 

_____ $x^2 \div$ _____ $x =$ _____ x


b) 

c) 


d) 

2. Model and complete each division statement.

a) $\frac{6x^2}{2x} =$ _____ x



b) $\frac{-12x^2}{4x} =$ _____



3. Find the quotient.

a) $\frac{35p^2}{-7p}$

b) $\frac{-25m^2}{-5}$