
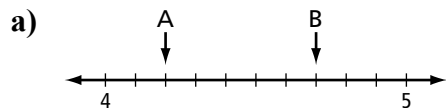


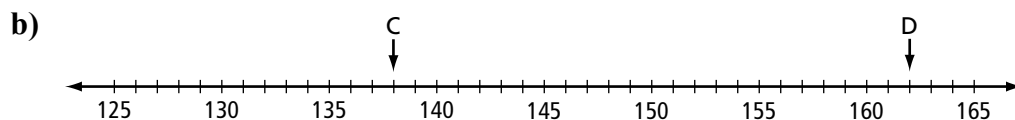
9.1 Warm Up

1. Plot the points -6 , -2 , and 4 on the number line. 

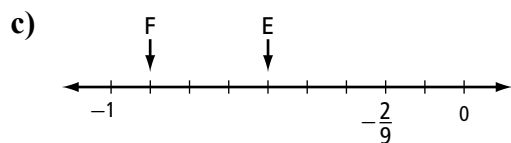
2. State the value of each letter.



A _____ B _____



C _____ D _____



E _____ F _____

3. Circle TRUE or FALSE for each statement. If false, rewrite the statement to make it true.

a) -5 is between -3 and 0 . TRUE or FALSE

b) $548 < 560$ TRUE or FALSE

c) $-14 > -20$ TRUE or FALSE

d) $\frac{3}{10}$ can be written as 0.03 . TRUE or FALSE
