

## 6.4 Converting Units

Focus: metric measure, Imperial measure, proportional reasoning

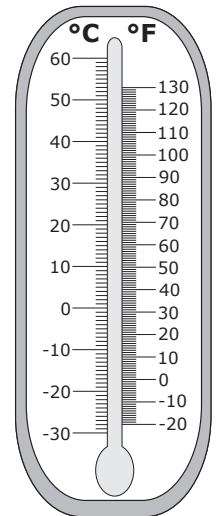
Warm Up	
1. How many cents are in 1 dollar? _____	2. How many minutes are in 1 hour? _____
3. How many years are in 1 decade? _____	4. What is a) half of 12? _____ b) $\frac{1}{4}$ of 12? _____
5. State 3 metric units for measuring length. _____	6. State 3 Imperial units for measuring length. _____
7. How many nickels are in \$2? _____	8. How many months are in $2\frac{1}{2}$ years? _____

### What Units Do You Usually Use?

- Sometimes it is necessary to convert a measurement to a different unit.
- For example, you may measure the length of a room in inches but a store sells trim by the foot. You may need to mix litres and millilitres to get the right mix of gas and oil for your grass trimmer.

1. Fill in the blanks to complete the statement, "I tend to measure..." The first one is done for you.

- the outside temperature in degrees \_\_\_\_\_ Celsius
- the oven temperature in degrees \_\_\_\_\_
- my weight in \_\_\_\_\_
- my height in \_\_\_\_\_
- driving distances in \_\_\_\_\_
- lengths in my home in \_\_\_\_\_
- liquids in the kitchen in \_\_\_\_\_
- weights in the kitchen in \_\_\_\_\_



**Converting Between Metric Units**

2. Write the metric units from shortest to longest.

centimetre      kilometre      metre      millimetre

\_\_\_\_\_


3. Often, if you know how to convert between 2 units, you are able to use what you know to convert between multiples of those units.

a)  $1 \text{ m} = \underline{\hspace{2cm}} \text{ cm}$        $2 \text{ m} = \underline{\hspace{2cm}} \text{ cm}$

b)  $1 \text{ cm} = \underline{\hspace{2cm}} \text{ mm}$        $3.5 \text{ cm} = \underline{\hspace{2cm}} \text{ mm}$

c)  $1 \text{ km} = \underline{\hspace{2cm}} \text{ m}$        $0.5 \text{ km} = \underline{\hspace{2cm}} \text{ m}$

- d) Show or explain how you can use proportions to make these conversions.
- \_\_\_\_\_
- \_\_\_\_\_
- \_\_\_\_\_

 For a review of how to convert from 1 metric unit to another, see **Skills Practice 10: Converting Between Metric Measures** on page 210.

4. Measure the following 3 items. State the measurement in 2 different metric units. Add 2 more items of your choice to the bottom of the chart.

Item	Length in Metric Units
a) the length of this book	_____ or _____
b) the height of the classroom door	_____ or _____
c) the thickness of a loonie	_____ or _____
d) _____	_____ or _____
e) _____	_____ or _____

5. Write the metric units from lightest to heaviest.

milligram      kilogram      gram

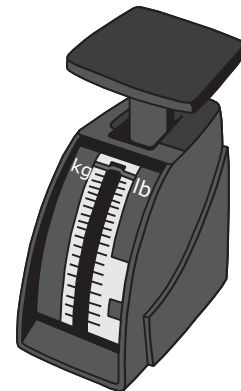
\_\_\_\_\_

6. Fill in each box.

a)  $1 \text{ kg} = \underline{\hspace{2cm}} \text{ g}$        $2 \text{ kg} = \underline{\hspace{2cm}} \text{ g}$

b)  $1 \text{ g} = \underline{\hspace{2cm}} \text{ mg}$        $500 \text{ g} = \underline{\hspace{2cm}} \text{ mg}$

You would usually talk about "weighing" something. Mathematicians and scientists refer to "measuring its mass."



7. Weigh the following 2 items. State the weight in 2 different metric units. Add 2 more items of your choice to the bottom of the chart.

Item	Weight in Metric Units
a) this book	_____ or _____
b) a loonie	_____ or _____
c) _____	_____ or _____
d) _____	_____ or _____

8. a) Which unit do you think is better to use when weighing this book? Explain your answer.

\_\_\_\_\_

\_\_\_\_\_

- b) Show how you can use proportions to convert grams to kilograms.

**Converting Between Imperial Measures**

9. Write the Imperial units from shortest to longest.

foot    inch    mile    yard

10. Fill in the blanks. Use a tape measure or yard stick for reference.

a) 1 ft = \_\_\_\_\_ in.      2 ft = \_\_\_\_\_ in.

b) 1 yd = \_\_\_\_\_ ft      10 yd = \_\_\_\_\_ ft

- Imperial lengths are often stated as a combination of feet and inches. Sometimes just inches are used.
- Twenty-two inches might be shown as 22" or 1' 10". People rarely refer to it as 1.833 ft.

11. Convert the units as indicated.

a) 18 inches = \_\_\_\_\_ ft \_\_\_\_\_ in.

b) 27 inches = \_\_\_\_\_ ft \_\_\_\_\_ in.


c) 48 inches = \_\_\_\_\_ ft \_\_\_\_\_ in.

d) 5 ft 4 in. = \_\_\_\_\_ in.

e) 6 ft = \_\_\_\_\_ in.

12. Measure the following 3 items. State the measurement in 2 different Imperial units. Add 2 more items of your choice to the bottom of the chart.

Item	Length in Imperial Units
a) my height	5 ft 11 in. or _____ in.
b) the height of the classroom door	_____ or _____
c) the thickness of a loonie	_____ or _____
d) _____	_____ or _____
e) _____	_____ or _____

 For a review of how to convert from one Imperial unit to another, see **Skills Practice 9: Converting Between Imperial Measures** on page 208.

- 13.** List the following Imperial weights from lightest to heaviest.

                    pound      ton      ounce

---

- There are 16 ounces in 1 pound.
- There are 2000 pounds in 1 ton.
- The abbreviation for ounce or ounces is "oz".
- The abbreviation for pound or pounds is "lb".
- The abbreviation for ton is "T".

- 14.** Fill in the blanks.

**a)**  $\frac{1}{2}$  lb = \_\_\_\_\_ oz

**b)**  $\frac{1}{4}$  lb = \_\_\_\_\_ oz

**c)**  $\frac{3}{4}$  lb = \_\_\_\_\_ oz

**d)** 20 oz = \_\_\_\_\_ lb

**e)** 4000 lb = \_\_\_\_\_ T

### ✓ Check Your Understanding

- 1.** The perimeter of your living room is 500 inches. You need to put baseboard around the perimeter of the room. Baseboard is sold by the foot. How many feet do you need to buy?
- 2.** Mohammed has entered a 1500-metre race. How many kilometres will he run?
- 3.** You are on holiday in the United States and buy a roast that weighs  $2\frac{1}{2}$  pounds. How many ounces is that?
- 4.** Kevin jokingly says that he is 5 ft 19 in. How tall is he?

