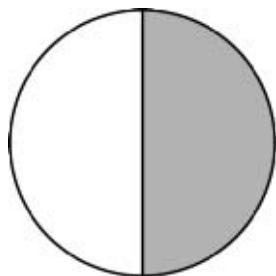


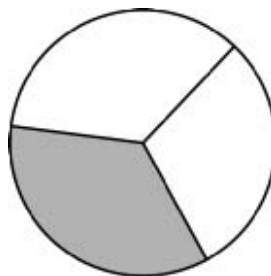
Name: _____ Date: _____

Master 9

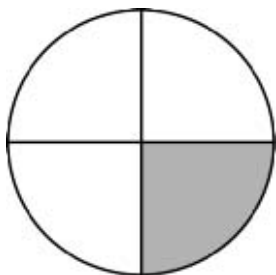
Fraction Circles



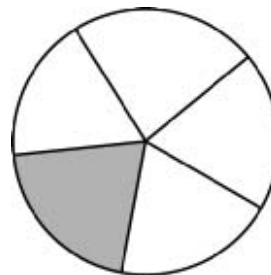
$$\frac{1}{2}$$



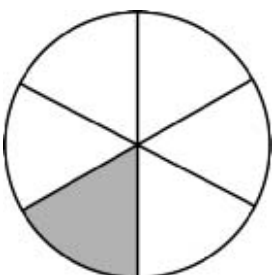
$$\frac{1}{3}$$



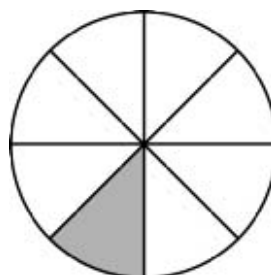
$$\frac{1}{4}$$



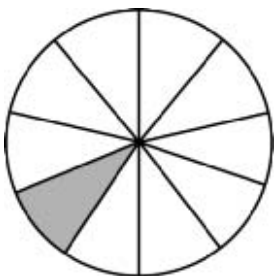
$$\frac{1}{5}$$



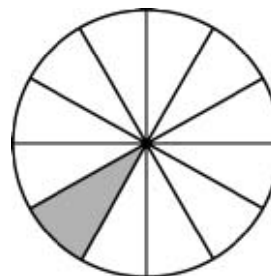
$$\frac{1}{6}$$



$$\frac{1}{8}$$



$$\frac{1}{10}$$



$$\frac{1}{12}$$

