

Name: _____

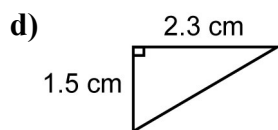
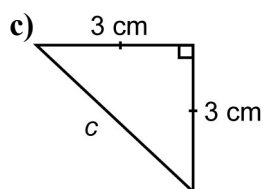
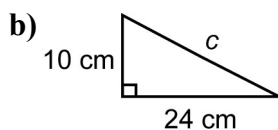
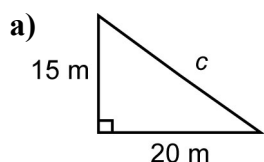
Date: _____

BLM 8.1.1

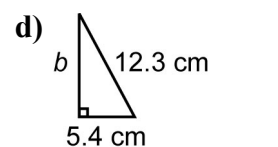
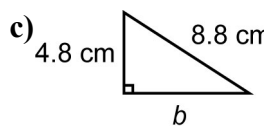
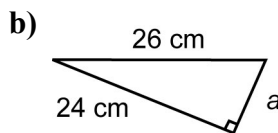
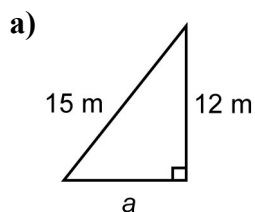
Practice: Apply the Pythagorean Theorem

For all questions, round your answer to the nearest tenth of a unit when necessary.

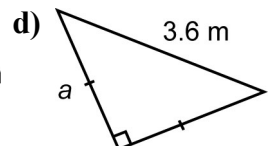
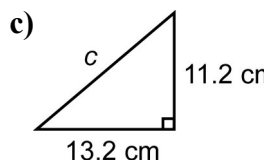
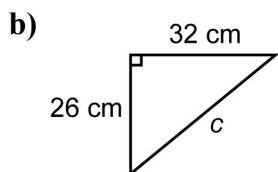
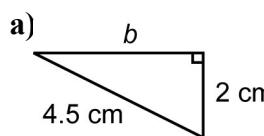
1. Find the length of each side c .



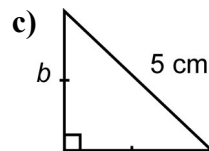
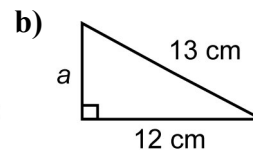
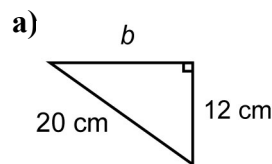
2. Find the length of each indicated side.



3. Find the length of each unknown side.



4. Find the area of each right triangle.



5. Find the length of each line segment.

