

Chapter 1 Practice Test





Write the word from the list to match each symbol. Then write whether each symbol is an HHPS or a WHMIS symbol.

biohazardous

flammable

oxidizing material

reactive

Symbol	Word	HHPS or WHMIS?
1. 		
2. 		
3. 		
4. 		

5. Which one of the following is *not* an HHPS?

- a) explosive
- b) flammable
- c) compressed gas
- d) poisonous

6. Describe three accidents that could happen if safety rules are broken.

- a) _____
- b) _____
- c) _____

Name: _____

Date: _____

BLM 1-10

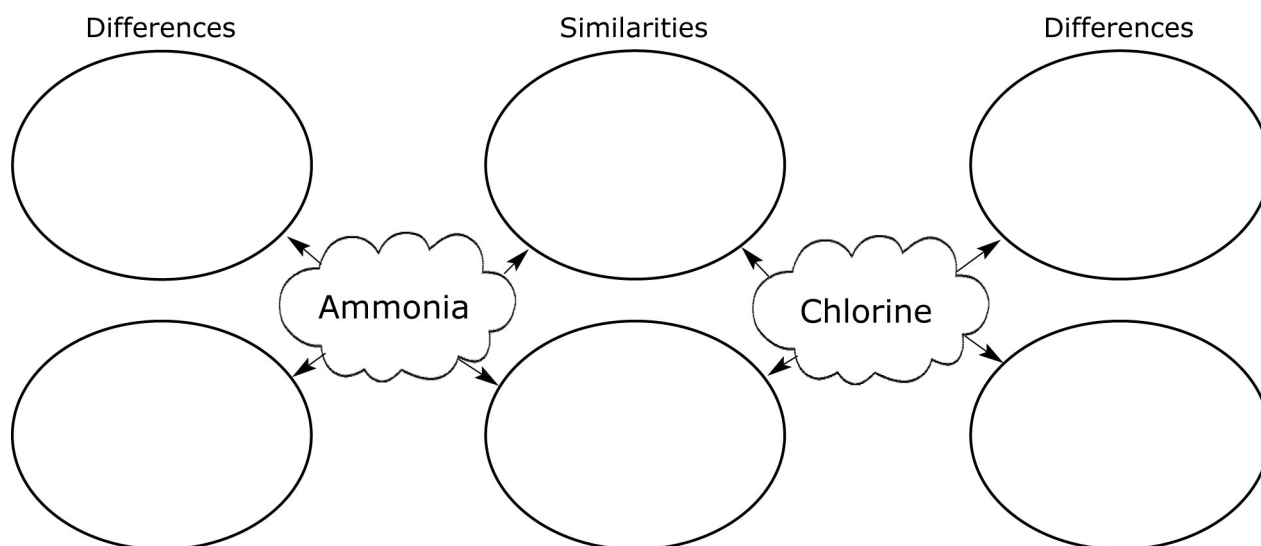
(continued)

7. List two safety procedures in the science classroom.

a) _____

b) _____

8. Complete the organizer comparing ammonia and chlorine. Show two similarities and two differences.



9. Draw the WHMIS symbol for each hazard.

a) Corrosive	b) Flammable material	c) Poisonous

10. Explain a procedure landowners can use instead of spraying herbicides.
