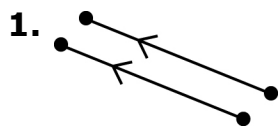
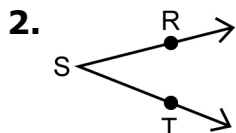


Section 3.1 Extra Practice

For #1 to #5, write the letter for the term that best matches each diagram.




A vertex

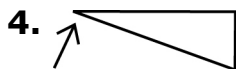


B parallel line segments

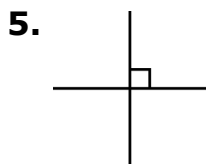
C $\angle RST$



D perpendicular lines



E line segment



6. Label the pairs of lines segments as

- parallel or
- perpendicular or
- neither

